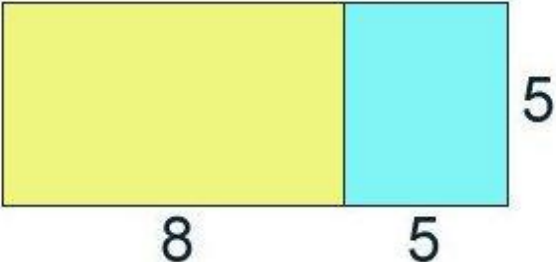
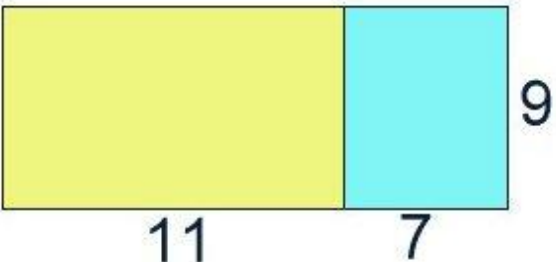
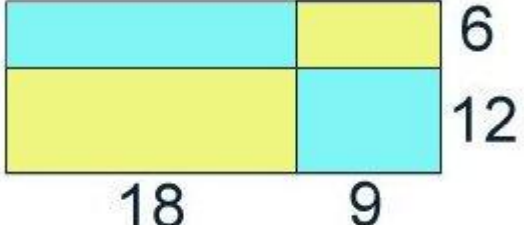


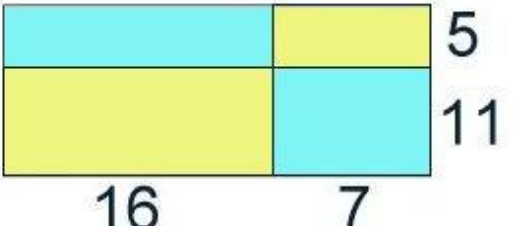
## Formeln und Flächen


Welcher Term passt zu der Fläche ? Kreuze an !

	$8 \cdot (5 + 5)$	
	$5 \cdot (8 + 5)$	
	$5 \cdot 5 + 8 \cdot 5$	

	$7 \cdot (9 + 11)$	
	$7 \cdot 20$	
	$9 \cdot 11 + 9 \cdot 7$	

	$6 + 12 \cdot 9 + 18$	
	$(18 + 9) \cdot 18$	
	$(6 + 12) \cdot (18 + 9)$	

	$16 \cdot (16 + 7)$	
	$16 \cdot 23$	
	$(9 \cdot 7) + (5 \cdot 11)$	

	$(4 + 28 + 7) \cdot (10 + 6)$	
	$6 \cdot 7 + 6 \cdot 28 + 6 \cdot 4$	
	$(4 + 28 + 7) + (6 \cdot 10)$	

Zeichne die Fläche zu der Formel  $(3 + 2) \cdot (4 + 5)$  maßstabsgerecht ! ( in cm )