

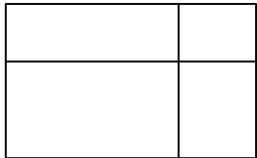



Formeln und Flächen (Lösung)

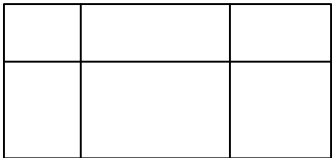
Welcher Term passt zu der Fläche ? Kreuze an !

 <div style="display: flex; justify-content: space-around; width: 100%;"> 8 5 </div>	$8 \cdot (5 + 5)$	<input type="checkbox"/>
	$5 \cdot (8 + 5)$	<input checked="" type="checkbox"/>
	$5 \cdot 5 + 8 \cdot 5$	<input checked="" type="checkbox"/>

 <div style="display: flex; justify-content: space-around; width: 100%;"> 9 11 </div>	$7 \cdot (9 + 11)$	<input checked="" type="checkbox"/>
	$7 \cdot 20$	<input checked="" type="checkbox"/>
	$9 \cdot 11 + 9 \cdot 7$	<input type="checkbox"/>

 <div style="display: flex; justify-content: space-around; width: 100%;"> 18 9 </div>	$6 + 12 \cdot 9 + 18$	<input type="checkbox"/>
	$(18 + 9) \cdot 18$	<input checked="" type="checkbox"/>
	$(6 + 12) \cdot (18 + 9)$	<input checked="" type="checkbox"/>

 <div style="display: flex; justify-content: space-around; width: 100%;"> 16 7 </div>	$16 \cdot (16 + 7)$	<input checked="" type="checkbox"/>
	$16 \cdot 23$	<input checked="" type="checkbox"/>
	$(9 \cdot 7) + (5 \cdot 11)$	<input type="checkbox"/>

 <div style="display: flex; justify-content: space-around; width: 100%;"> 4 28 7 </div>	$(4 + 28 + 7) \cdot (10 + 6)$	<input checked="" type="checkbox"/>
	$6 \cdot 7 + 6 \cdot 28 + 6 \cdot 4$	<input type="checkbox"/>
	$(4 + 28 + 7) + (6 \cdot 10)$	<input type="checkbox"/>

Zeichne die Fläche zu der Formel $(3 + 2) \cdot (4 + 5)$

